

# Mental Math

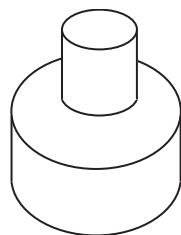
E-1

## Grade 9 Mathematics (10F)

Substrand: 3-D Objects and 2-D Shapes

Specific Learning Outcome: 9.SS.2

General Questions	Answers
1. What value of $m$ satisfies the equation $\frac{5}{4}m = 1$ ?	$m = \frac{4}{5}$
2. What is the volume of a pool that measures 7 m by 3 m by 2 m?	42 m <sup>3</sup>
3. On average, if you earn \$40 each week, how much money would you earn in one year?	\$2080
4. Add: $42 + 88 + 58$	188
5. How many kilograms are equivalent to 250 g?	0.25 kg
6. A hockey player scores a goal in 25% of her games. How many goals do you expect her to make if she plays 40 games?	10 goals
Unit Questions	
<b>For questions 7, 8, and 9, a right cylinder has a base that measures 10 cm in diameter and is sitting on top of another cylinder with a base that measures 20 cm in diameter (use <math>\pi \approx 3</math>).</b>	
7. Estimate the area of the circular base of the little cylinder.	$\approx 75 \text{ cm}^2$
8. Estimate the surface area of the base of the big cylinder.	$\approx 300 \text{ cm}^2$
9. Estimate the area that overlaps.	$\approx 75 \text{ cm}^2$
10. How many faces are there in a right triangular prism?	5 faces
Other Questions	
11.	
12.	



# Mental Math

## Grade 9 Mathematics (10F)

E-2

Substrand: 3-D Objects and 2-D Shapes

Specific Learning Outcome: 9.SS.2

### General Questions

1. Simplify the ratio 21 : 6.
2. Calculate the value of a 15% tip on a bill of \$20.
3. Add:  $\frac{1}{2} + \frac{1}{8}$
4. Which represents the better purchase: 5 shirts for \$100 or 10 shirts for \$160?
5. Find the area of a circle with a radius of 1 cm (round to the nearest 10th).
6. There are 53 students registered for Grade 10 Essential Mathematics next year. If 38 more registrations are allowed, what total number of students will be registered?

### Answers

7:2

\$3

$\frac{5}{8}$

10 for \$160

3.1 cm<sup>2</sup>

91 students

### Unit Questions

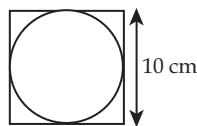
7. How many faces are there in a right rectangular prism?
8. Two cubes with 5 cm edges are glued together so that one is aligned on top of the other. What is the surface area of the glued shape?

6 faces

250 cm<sup>2</sup>

For questions 9 and 10, a right cylinder with a 10 cm diameter sits on top of a cube with 10 cm edges (as shown below in this top view). Use  $\pi \approx 3$ .

9. Estimate the area that overlaps.
10. Estimate the area that does not overlap.



$\approx 75 \text{ cm}^2$

$\approx 25 \text{ cm}^2$

### Other Questions

11.

12.

# Mental Math

## Grade 9 Mathematics (10F)

E-3

Substrand: 3-D Objects and 2-D Shapes

Specific Learning Outcome: 9.SS.2

### General Questions

1. Estimate a tax of 7% on a purchase of \$7.86.
2. Zahra received a mark of  $\frac{14}{20}$  on her mathematics assignment. Express her results as a percentage.
3. How many hours pass between 7:00 a.m. on Monday and 7:00 p.m. on Tuesday?
4. Subtract  $\frac{1}{8}$  from  $\frac{1}{2}$ .
5. What is the probability of rolling a 4 when you roll a standard 6-sided die?
6. You owe \$300 to a friend. How many weeks will it take you to repay your debt if you give your friend \$12 a week?

### Answers

$\approx \$0.55$

70%

36 hours

$\frac{3}{8}$

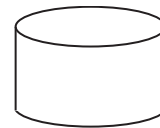
$\frac{1}{6}$

25 weeks

### Unit Questions

For questions 7 and 8, refer to a right cylinder with a base having a radius measuring 3 cm and a height of 2 cm.

7. Estimate the area of the circular end (use  $\pi \approx 3$ ).



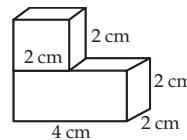
$\approx 27 \text{ cm}^2$

8. Estimate the area of the curved surface.

$\approx 36 \text{ cm}^2$

For questions 9 and 10, use the diagram below in which a cube is on top of a rectangular prism.

9. Determine the area of the overlap.
10. Determine the surface area of the front face of the shape.



$4 \text{ cm}^2$

$12 \text{ cm}^2$

### Other Questions

11.

12.

# Mental Math

## Grade 9 Mathematics (10F)

E-4

Substrand: 3-D Objects and 2-D Shapes

Specific Learning Outcome: 9.SS.3

### General Questions

1. You have \$216 in your wallet. How much money will you have left over if you purchase a bracelet for \$80?
2. Evaluate:  $\frac{1}{2} \times \frac{3}{8}$
3. How much money will you get back if you make a purchase of \$14.76 with a \$20 bill?
4. How many \$10 bills are equivalent to \$1000?
5. Find the area of a triangle with a base of 4 m and a height of 6 m.
6. Solve the equation  $4 + 2x = 10$ .

### Answers

\$136

$\frac{3}{16}$

\$5.24

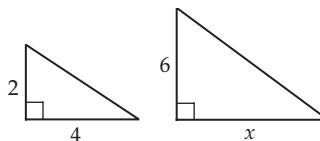
100 bills

12 m<sup>2</sup>

$x = 3$

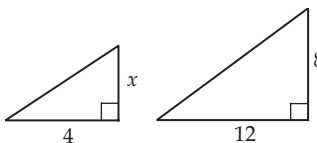
### Unit Questions

7. Two similar triangles are shown. Find the value of  $x$ .



8. If two triangles are similar, the measurements of their corresponding sides are equal. True or false?
9. Complete the sentence. If two triangles are similar, the measures of their corresponding angles are \_\_\_\_\_.

10. Two similar triangles are shown. Find the value of  $x$ .



12

False

equal

$\frac{8}{3}$

### Other Questions

11.

12.

# Mental Math

## Grade 9 Mathematics (10F)

E-5

Substrand: 3-D Objects and 2-D Shapes

Specific Learning Outcome: 9.SS.3

### General Questions

1. Simplify the fraction  $\frac{12}{16}$ .
2. You deposit two cheques of \$438 and \$142 in your savings account. What is the total amount of your deposit?
3. What is the volume of a pool that measures 20 m by 4 m by 10 m?
4. If you raise the price of a pair of \$240 skates by 10%, what is the new price?
5. Which of the following fractions is smaller:  $\frac{4}{9}$  or  $\frac{2}{3}$ ?
6. How much will each of 7 lottery prize winners get if they divide \$3500 equally?

### Answers

$$\frac{3}{4}$$

\$580

800 m<sup>3</sup>

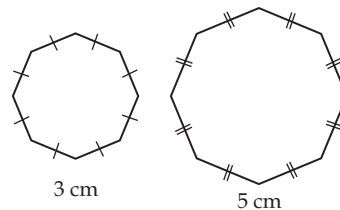
\$264

$$\frac{4}{9}$$

\$500

### Unit Questions

7. A regular octagon with 5 cm sides is similar to a regular octagon with 10 cm sides. True or false?
8. A regular pentagon with 2 cm sides is similar to a regular hexagon with 2 cm sides. True or false?
9. Are these two polygons similar? Explain.



True

False

Yes, same shape and same angles

10. Solve for  $x$  in the proportion:  $\frac{x}{8 \text{ cm}} = \frac{3 \text{ cm}}{2 \text{ cm}}$

$$x = 12 \text{ cm}$$

### Other Questions

11.

12.

# Mental Math

## Grade 9 Mathematics (10F)

E-6

Substrand: 3-D Objects and 2-D Shapes

Specific Learning Outcome: 9.SS.3

### General Questions

1. If 89% of 200 students from a school live at least 10 km from school, how many students live at least 10 km from school?
2. Evaluate:  $-17 + 24$
3. How much tax at 13% is there on a \$5 book?
4. What is the measure of the third angle of a right triangle with an angle of  $50^\circ$ ?
5. One week, it rained 16 mm in Winnipeg. The second week, it rained 5 mm and the third week, it rained 9 mm. How many millimetres did it rain on average each week in Winnipeg over the 3 weeks?
6. Write the expression that corresponds to the sum of  $m$  cubed and  $m$ .

### Answers

178 students

7

\$0.65

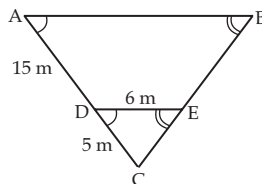
$40^\circ$

10 mm

$m^3 + m$

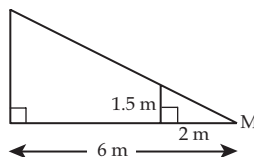
### Unit Questions

7. Find the length of side AB.



24 m

8. You measure 1.5 m in height and your shadow is 2 m long. A tree's shadow is 6 m long. Find the height of the tree.



4.5 m

9. Any two squares are similar. True or false?
10. Two hexagons can be similar if one hexagon is regular and the other is not. True or false?

True

False

### Other Questions

11.

12.