



## ANNEXE 11 : Quel véhicule ira le plus vite?

Nom : \_\_\_\_\_

Date : \_\_\_\_\_

Étudie les paires d'images suivantes. D'après toi, quel véhicule peut se déplacer le plus rapidement. Explique ta réponse.



---



---

---

---

---

---



---



---

---

---

---

---



---

---

---

---

---

---

