

Mental Math

Grade 9 Mathematics (10F)

I-1

Strand: Number Review

Specific Learning Outcomes: 9.N.1 and 9.N.2

General Questions or Review Relating to the SLOs	Answers
Evaluate:	
1. 2^5	32
2. 3^0	1
3. -1^4	-1
4. $2^3 + 3^2$	17
5. $4^3 - 5^2$	39
6. Write the following as a power: $3 \times 3 \times 3 \times 3$	3^4
Simplify to a single power:	
7. $3^4 \times 3^5$	3^9
8. $\frac{5^{13}}{5^7}$	5^6
9. $(4^3)^2$	4^6
10. $(5^3)(5^0)$	5^3
Other Questions	
11.	
12.	

Mental Math

Grade 9 Mathematics (10F)

I-2

Strand: Number Review

Specific Learning Outcomes: 9.N.1 and 9.N.2

General Questions or Review Relating to the SLOs

Answers

Simplify to a single power:

1. $9^2 \times 9^5$

9^7

2. $(5^3)^4$

5^{12}

3. $4^3 \times 4^5$

4^8

4. $\frac{8^{10}}{8^6}$

8^4

Evaluate:

5. $(-2)^3$

-8

6. $-(3)^4$

-81

7. $(-4)(-4)(-4)$

-64

8. $\frac{4^0 \times 2^3}{2}$

4

9. $\frac{3^2 + 2^0}{5}$

2

10. $\frac{8^2}{4^3}$

1

Other Questions

11.

12.

Mental Math

I-3

Grade 9 Mathematics (10F)

Strand: Number Review

Specific Learning Outcomes: 9.N.3 and 9.N.4

General Questions or Review Relating to the SLOs

Answers

1. Place in ascending order: $\frac{3}{4}, \frac{2}{5}, \frac{4}{6}$

$\frac{2}{5}, \frac{4}{6}, \frac{3}{4}$

2. What is the decimal number that corresponds to $0.8 + \frac{3}{4}$?

1.55

3. The fraction $\frac{35}{4}$ is between which two consecutive whole numbers?

8 and 9

For questions 4 and 5, place numbers in descending order.

4. $\frac{32}{4}, 8^0, 2^4$

$2^4, \frac{32}{4}, 8^0$

5. $-0.8, -\frac{4}{7}, -0.2$

$-0.2, -\frac{4}{7}, -0.8$

Evaluate:

6. $3 + 2^3$

11

7. $(7^0 + 3^2)^2$

100

8. $\frac{4 + 2^3}{6}$

2

9. $(-3)(4^2 + 2^0)$

-51

10. $\frac{2^5}{4^2} - 5^0$

1

Other Questions

11.

12.

Mental Math

Grade 9 Mathematics (10F)

I-4

Strand: Number Review

Specific Learning Outcome: 9.N.5

General Questions or Review Relating to the SLO

Answers

Evaluate:

- $\sqrt{\frac{25}{16}}$
- $\sqrt{\frac{4}{9}} + \frac{\sqrt{25}}{3}$
- $\sqrt{3^4}$
- $(\sqrt{10^2}) \div 10$
- $-\sqrt{64}$
- Which numbers are not perfect squares: 4, 89, 121, 256, 1000?
- The square root of a number is 15. What is the number?
- What is the number if the square root is 14?
- The product of two numbers is 36. What is the product of their square roots?
- Evaluate: $(\sqrt{36} - \sqrt{16})^2$

$\frac{5}{4}$

$\frac{7}{3}$

9

1

-8

89 and 1000

225

196

6

4

Other Questions

11.

12.

Mental Math

Grade 9 Mathematics (10F)

I-5

Strand: Number Review

Specific Learning Outcomes: 9.N.1 to 9.N.6

General Questions or Review Relating to the SLOs	Answers
For questions 1 to 4, estimate the value.	
1. $\sqrt{9.2 \times 3.9}$	≈ 6
2. $\sqrt{\frac{145}{9}}$	≈ 4
3. $\sqrt{0.17}$	≈ 0.4
4. $\sqrt{50}$	≈ 7
5. The square of 6.1 is close to what whole number?	37
Evaluate:	
6. $9^2 - 4^3$	17
7. $\frac{3 \times 3 \times 3 - 5 \times 5}{2^0}$	2
8. $\sqrt{\frac{5^4}{25}}$	5
9. $\frac{(7^2)^2}{49} + 1$	50
10. $\sqrt{12 \times 10 + 3^0}$	11
Other Questions	
11.	
12.	

Mental Math

I-6

Grade 9 Mathematics (10F)

Substrand: Patterns Review

Specific Learning Outcomes: 9.PR.1 and 9.PR.2

General Questions or Review Relating to the SLOs

Answers

Find the next term in the following patterns.

1. 28, 31, 34, _____

37

2. 23, 16, 9, _____

2

Susan initially owes her neighbour \$5.00. She rakes their lawn and is paid \$3 per hour. Using the graph of this scenario shown below, answer questions 3 to 7.

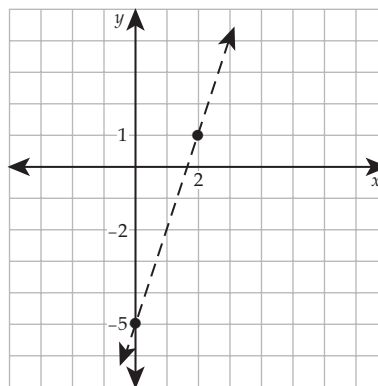
3. What is x when y is equal to 1?

4. How much does the value of y increase when the value of x increases by 1?

5. What is y when x is equal to 3?

6. What is y when x equals 0?

7. What is x when y is equal to -2 ?



2

3

4

-5

1

8. Saad is 5 years younger than three times the age of Natasha. What is the age of Saad if Natasha is 3 years old?

4 years old

9. Complete the pattern: 7, 14, 21, _____

28

10. You can represent the pattern 9, 16, 25, 36, . . . , using a linear equation? True or false?

False

Other Questions

11.

12.

Mental Math

I-7

Grade 9 Mathematics (10F)

Substrand: Patterns Review

Specific Learning Outcomes: 9.PR.1 and 9.PR.2

General Questions or Review Relating to the SLOs

1. If $y = x + 3$, what is the value of y if $x = 3$?
2. If $y = 3x - 2$, what is the value of x if $y = 13$?
3. If $y = 5x + 3$, what is the value of y if $x = 4$?

Answers

6

5

23

Use the table for questions 4 to 10. The variable h represents the number of hours of work and the variable s is the salary.

h	0	7	10	25
s	0	56	80	200

4. If $h = 15$, what is s ?
5. If $s = 64$, what is h ?
6. If $h = 30$, what is s ?
7. If $s = 800$, what is h ?
8. What is the hourly rate of pay?
9. How many hours of work correspond to a salary of \$888?
10. What would be the salary equivalent to 8 hours of work each day for 5 days?

120

8

240

100

\$8/hour

111 hours

\$320

Other Questions

11.

12.

Mental Math

Grade 9 Mathematics (10F)

I-8

Substrand: Variables and Equations Review

Specific Learning Outcome: 9.PR.3

General Questions or Review Relating to the SLO

Answers

Solve the following equations.

1. $5x = 20$

$x = 4$

2. $2x - 16 = 18$

$x = 17$

3. $3x - 5 = x + 7$

$x = 6$

4. $3(x - 2) = 9$

$x = 5$

5. $6x = 16 + 2x$

$x = 4$

6. $\frac{1}{2}x = 8$

$x = 16$

7. $\frac{3}{4}x - 3 = 6$

$x = 12$

8. $\frac{8}{x} = 12$

$x = \frac{2}{3}$

9. $3x + 4 = 2(2x - 1)$

$x = 6$

10. $\frac{x}{2} + 1 = \frac{3x}{2} - 7$

$x = 8$

Other Questions

11.

12.

Mental Math

I-9

Grade 9 Mathematics (10F)

Substrand: Variables and Equations Review

Specific Learning Outcomes: 9.PR.3 and 9.PR.4

General Questions or Review Relating to the SLOs

Answers

Solve the following equations and inequalities.

1. $3x + 9 = 6$

$$x = -1$$

2. $\frac{3}{x} + \frac{2}{x} = 5$

$$x = 1$$

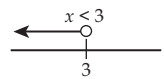
3. $\frac{1}{3}(m + 12) = \frac{2}{6}$

$$m = -11$$

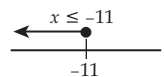
4. $\frac{x}{4} - \frac{7}{4} = \frac{1}{4}$

$$x = 8$$

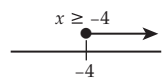
5. $3x < 9$



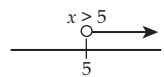
6. $2x - 3 \geq 3x + 8$



7. $2x + 6 \geq -2$



8. $5 - 3x < -10$



Write a linear inequality to represent the following.

9. Five chocolate bars cost more than \$12 and the cost of each bar is unknown.

$$5x > 12$$

10. Jean ran less than 18 km in 3 hours and his speed is unknown.

$$3x < 18$$

Other Questions

11.

12.

Mental Math

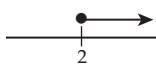
Grade 9 Mathematics (10F)

I-10

Substrand: Variables and Equations Review

Specific Learning Outcomes: 9.PR.4 and 9.PR.5

General Questions or Review Relating to the SLOs

- $x < 3$ is the general solution of the linear inequality $2x - 1 \leq x + 2$. True or false?
- The graph shown on the right is the general solution to the linear inequality $3 - 2x \leq 1 - x$. True or false?

- $x = 5$ is a solution to the linear inequality $3 - 2x \leq 1 - x$. True or false?
- $x = 4$ is a solution to the linear inequality $\frac{2}{3}x - 1 > 2$. True or false?

Answers

False

True

True

False

Respond to questions 5 to 10 concerning the polynomial $3x^2 - 2y^2 + 9$.

- What are the two variables in the polynomial?
- What is the coefficient of the variable y ?
- How many terms does the polynomial have?
- What is the exponent of the variable x ?
- What is the value of the constant?
- What is the coefficient of the variable x ?

x and y

-2

3

2

9

3

Other Questions

11.

12.

Mental Math

Grade 9 Mathematics (10F)

I-11

Substrand: Variables and Equations Review

Specific Learning Outcome: 9.PR.6

General Questions or Review Relating to the SLO	Answers
Simplify the following polynomials for questions 1 to 4.	
1. $3x - 2x^2 + x - 3x^2$	$4x - 5x^2$
2. $4a^2 + 4 - 3a^2 - 1$	$a^2 + 3$
3. $m + 6 - 4 - 2m$	$-m + 2$
4. $5y - 3 + y^2 - 2y - 4y^2 + 5$	$-3y^2 + 3y + 2$
5. Write a polynomial of 4 terms equivalent to $2p - 5$.	Sample: $3p - p - 7 + 2$
Write an expression for the perimeter for questions 6 to 8.	
6. A rectangle that has a length of $5d + 2$ and a width of $3d - 1$.	$16d + 2$
7. The three sides of a triangle are w , $3w + 4$, and $4w - 2$.	$8w + 2$
8. The side of a square is $5x + 3$.	$20x + 12$
Simplify the following polynomials for questions 9 and 10.	
9. $(4x - 2) + (8x + 5)$	$12x + 3$
10. $(5m - 3) - (2m - 7)$	$3m + 4$
Other Questions	
11.	
12.	

Mental Math

Grade 9 Mathematics (10F)

I-12

Substrand: Variables and Equations Review

Specific Learning Outcomes: 9.PR.6 and 9.PR.7

General Questions or Review Relating to the SLOs

Answers

Simplify the following polynomials for questions 1 to 3.

1. $(7c - 5) - (4c)$

$3c - 5$

2. $3x - (4 - 6x)$

$9x - 4$

3. $(y + 7) + (y^2 - 7)$

$y^2 + y$

Multiply the following monomials for questions 4 to 6.

4. $(3x)(-2x)$

$-6x^2$

5. $\frac{2}{3}t(3t)$

$2t^2$

6. $(-8y)(-3y)$

$24y^2$

Divide the following equations for questions 7 to 9.

7. $\frac{8x^2}{2x}$

$4x$

8. $(5xy) \div (5y)$

x

9. $(-12x^2) \div (4x)$

$-3x$

10. The area of a rectangle is $72t^2$ and its width is $12t$. What is its length?

$6t$

Other Questions

11.

12.

Mental Math

Grade 9 Mathematics (10F)

I-13

Substrand: Measurement Review

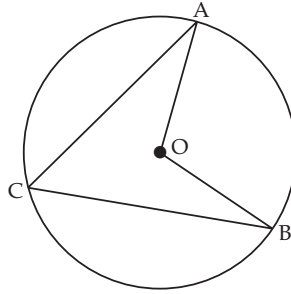
Specific Learning Outcome: 9.SS.1

General Questions or Review Relating to the SLO

Answers

For questions 1 to 3, point O is the centre of the circle.

- If $\angle AOB = 32^\circ$, what is the measure of $\angle ACB$?
- If $\angle ACB = 54^\circ$, what is the measure of $\angle AOB$?
- If $\widehat{ACB} = 320^\circ$, what is the measure of $\angle AOB$?



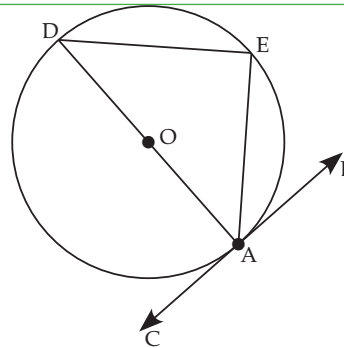
16°

108°

40°

For questions 4 to 7, CB is tangent to diameter AD at point A on the circle with centre O.

- What is the measure of $\angle BAD$?
- What is point A called?
- What is the measure of $\angle DEA$?
- What is arc DEA called?



90°

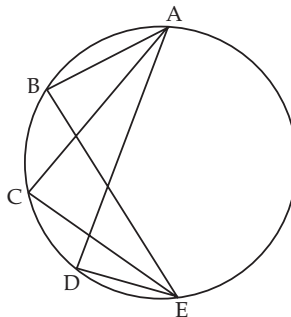
the tangent point

90°

semicircle

For questions 8 to 10, use the following figure.

- If $\angle ABE = 85^\circ$, what other angle measures do you know?
- What name is given to angles such as $\angle ABE$, $\angle ACE$, and $\angle ADE$?
- Complete the following sentence. $\angle ABE$ and $\angle ACE$ are congruent because they are subtended by _____.



$\angle ACE = 85^\circ$ and $\angle ADE = 85^\circ$

inscribed angle

the same arc

Other Questions

11.

12.

Mental Math

Grade 9 Mathematics (10F)

I-14

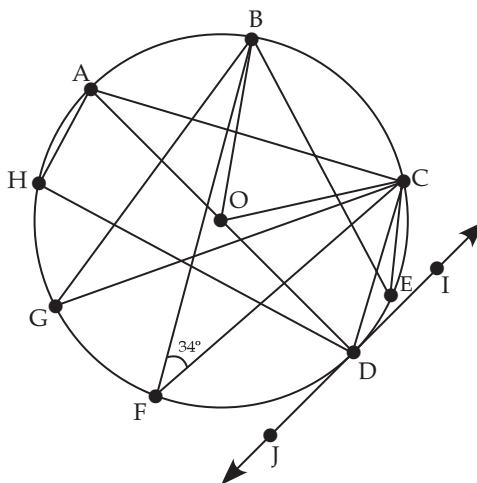
Substrand: Measurement Review

Specific Learning Outcome: 9.SS.1

General Questions or Review Relating to the SLO

Given the circle with centre O , diameter AD , tangent IJ , tangent point D , and the measure $\angle BFC = 34^\circ$, determine the measure of:

- $\angle ADJ$
- $\angle BGC$
- $\angle BEC$
- $\angle BOC$
- $\angle ACD$
- $\angle AHD$



Answers

90°

34°

34°

68°

90°

90°

Using the diagram above, give an example of

- an inscribed angle of arc AH .
- a central angle involving point B .
- a radius.
- $\angle AHD$ is subtended by an arc. What is the name of the arc?

$\angle ADH$

$\angle BOC$ and
 $\angle BOA$

$AO, BO, CO,$
or DO

\widehat{AD}

Other Questions

11.

12.

Mental Math

Grade 9 Mathematics (10F)

I-15

Substrand: 3-D Objects and 2-D Shapes Review

Specific Learning Outcome: 9.SS.3

Mental Math

Grade 9 Mathematics (10F)

I-16

Substrand: Transformations Review

Specific Learning Outcome: 9.SS.4

General Questions or Review Relating to the SLO

1. A square is redrawn in a ratio of 2:1. If the sides of the first square measure 8 cm, what is the measure of the sides of the second square?
2. The side of a 12 cm rectangle was reduced so that its side measures 8 cm. What scale factor was used?
3. A figure has a perimeter of 18 inches. If this figure is enlarged on a scale of 5:3, what will be the perimeter of the new figure?
4. A figure with a 10 cm perimeter is initially enlarged according to a scale of 3:2 and then reduced with a scale of 2:3. What is the perimeter of the new figure?

Answers

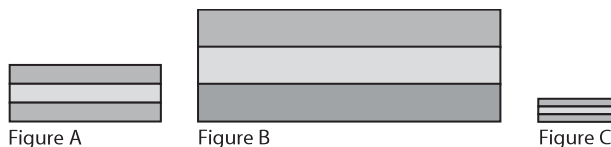
16 cm

$\frac{2}{3}$

30 inches

10 cm

Use Figures A, B, and C for questions 5 to 8.



5. Estimate the scale factor used to transform Figure A to Figure B.
6. What is the scale factor used to transform Figure B to Figure A?
7. Estimate the scale factor to transform Figure A to Figure C.
8. Estimate the scale factor used to transform Figure C to Figure B.

2

$\frac{1}{2}$

0.5 or $\frac{1}{2}$

4

For questions 9 and 10, four identical squares can be placed in a large square.

9. What is the scale factor used to transform a small square to the large square?
10. If one side of the large square measures 20 cm, what is the measure of a side of a small square?

2

10 cm

Other Questions

11.

12.

Mental Math

Grade 9 Mathematics (10F)

I-17

Substrand: Transformations Review

Specific Learning Outcome: 9.SS.5

General Questions or Review Relating to the SLO

Answers

Point A is $(4, -2)$. What would the coordinates of point A be after each of the requested transformations?

1. A reflection over the x -axis.
2. A reflection over the y -axis.
3. A reflection over the origin.

$(4, 2)$

$(-4, -2)$

$(-4, 2)$

Point B is $(3, 1)$. Find the new coordinates of point B after completing a rotation in relation to the origin with each of the following angles.

4. 90° clockwise
5. 180°
6. 90° counter-clockwise
7. 270° clockwise

$(1, -3)$

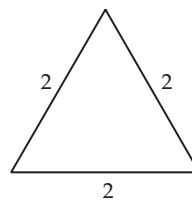
$(-3, -1)$

$(-1, 3)$

$(-1, 3)$

For the following figure, determine

8. the number of lines of symmetry.
9. the order of rotation.
10. the angle of rotation.



3

3

120°

Other Questions

11.

12.

Mental Math

Grade 9 Mathematics (10F)

I-18

Substrand: Data Analysis Review

Specific Learning Outcome: 9.SP.1

General Questions or Review Relating to the SLO

Answers

Identify the factor that would influence the results of data collection for questions 1 to 10.

1. The person must give their phone number.
2. The person must answer questions before 1 p.m.
3. The question demonstrates a preference for the product.
4. The sample is not representative of the population.
5. The person does not understand the questions.
6. The question refers to religion.
7. The question asks for judgment on a particular person.
8. A telephone survey takes more than 45 minutes.
9. The survey focuses on luxury cars.
10. The person must indicate in what country they were born.

privacy

time and
timing

a bias

a bias

use of
language

cultural
sensitivity

ethics

time and
timing

cost/bias

privacy

Other Questions

11.

12.

Mental Math

Grade 9 Mathematics (10F)

I-19

Substrand: Data Analysis Review

Specific Learning Outcomes: 9.SP.2 and 9.SP.3

General Questions or Review Relating to the SLOs	Answers
1. A sample is representative of a _____.	population
2. A census collects data from a _____.	population
For questions 3 to 6, determine whether you should use a <i>sample</i> or a <i>population</i>.	
3. A school wants to know what sport interests the students.	population
4. A pen factory wants to know if all pens are manufactured correctly.	sample
5. Pierre wants to know if teachers prefer to wear long-sleeve or short-sleeve shirts.	sample
6. A small organization wants to know the proportion of people in the organization who were born in Winnipeg and live in Winnipeg.	population
For questions 7 to 9, determine whether a sample or a population has been used.	
7. To determine the life of a light bulb, a company has randomly selected 150 light bulbs	sample
8. To determine the wishes of the student body, Marc asked everyone who was in the cafeteria which school president candidate they would vote for.	sample
9. To determine what technology to use with her class, a teacher asked her students if they had a cellphone.	population
10. Out of 2000 people, 450 were given a survey. This is a _____.	sample
Other Questions	
11.	
12.	

Mental Math

Grade 9 Mathematics (10F)

I-20

Substrand: Data Analysis Review

Specific Learning Outcome: 9.SP.4

General Questions or Review Relating to the SLO

1. In a class, 5 out of 20 students do not like chocolate. What is the probability that a person likes chocolate?
2. The probability of seeing a red car in Winnipeg is 0.40. How many red cars would you expect to see if there are 500 000 cars?
3. What is the probability of rolling a prime number with a regular 6-sided die?

Answers

$$\frac{3}{4} \text{ or } 0.75$$

200 000

$$\frac{3}{6} = \frac{1}{2}$$

For questions 4 to 7, describe the type of probability as theoretical or experimental in each of the scenarios.

4. After rolling a number cube (die) 6 times, Nadine says that the probability of rolling a 4 is $\frac{2}{6}$.
5. The probability of showing "heads" when flipping a coin is $\frac{1}{2}$.
6. By randomly surveying 100 people, it was determined that 15% of people have blue eyes.
7. The probability of drawing a green ball out of a bag that contains 1 green, 2 blue, and 1 yellow ball is 0.25.

experimental

theoretical

experimental

theoretical

For questions 8 to 10, there is 1 black ball and 3 white balls in a bag. Marc takes a ball, determines its colour, and puts it back in the bag.

8. What is the theoretical probability (as a percent) that he pulls a black ball on his first pull?
9. What is the theoretical probability (as a percent) that he pulls a white ball on his second pull?
10. If Marc picks a ball and replaces it, twice, and pulls 2 white balls, what is the experimental probability of pulling a white ball (as a percent)?

25%

75%

100%

Other Questions

11.

12.